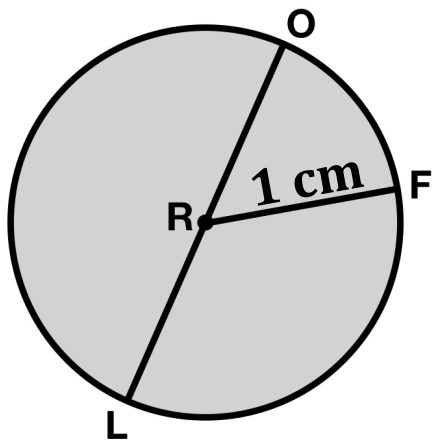


Name _____

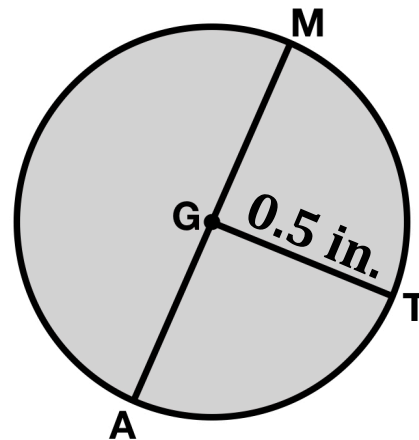
Examine the circle below.



- A) What is the name of the circle?
- B) Name two radii.
- C) Name a diameter.
- D) What everyday object do you think this circle could be, based on its dimensions?
- E) Represent the circumference of the circle using π .
- F) Represent the circumference of the circle using 3.14 to approximate π .

Name _____

Examine the circle below.

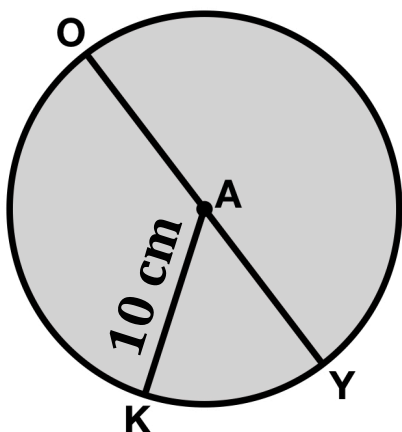


- A) What is the name of the circle?
- B) Name two radii.
- C) Name a diameter.
- D) What everyday object do you think this circle could be, based on its dimensions?
- E) Represent the circumference of the circle using π .
- F) Represent the circumference of the circle using 3.14 to approximate π .

≈

Name _____

Examine the circle below.

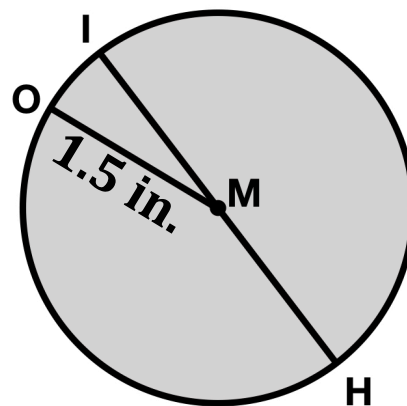


- A) What is the name of the circle?
- B) Name two radii.
- C) Name a diameter.
- D) What everyday object do you think this circle could be, based on its dimensions?
- E) Represent the circumference of the circle using π .
- F) Represent the circumference of the circle using 3.14 to approximate π .

≠

Name _____

Examine the circle below.



- A) What is the name of the circle?
- B) Name two radii.
- C) Name a diameter.
- D) What everyday object do you think this circle could be, based on its dimensions?
- E) Represent the circumference of the circle using π .
- F) Represent the circumference of the circle using 3.14 to approximate π .